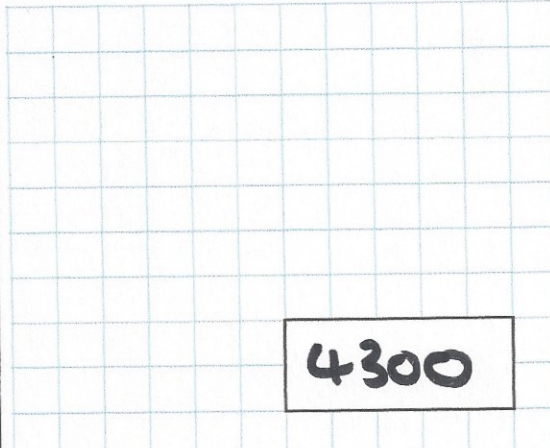




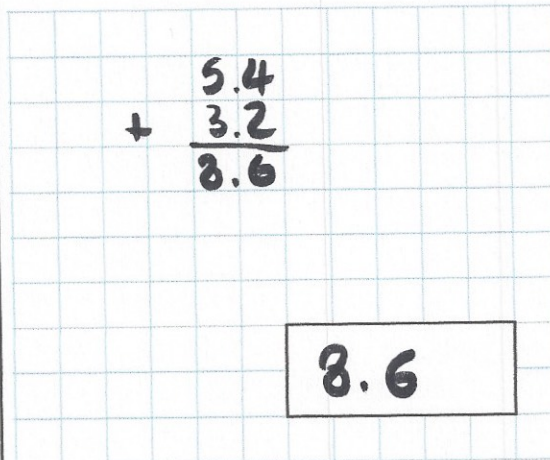
1st April

$43 \times 100$



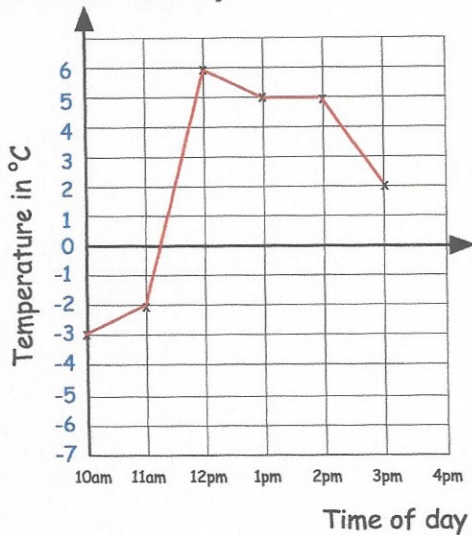
**4300**

$5.4 + 3.2$



**8.6**

The graph shows the temperature in a town on a cold day



Between what two times did the temperature stay the same?

**1pm and 2pm**

At 4pm the temperature was 3°C colder than at 3pm.

What was the temperature at 4pm?

**-1°C**

Each card on the left matches one on the right.

Draw lines to match the cards which are equal in value

