

Name: Andrew

Primary 5-a-day

Bronze



12th April

$155 - 40$

$$\begin{array}{r} 155 \\ - 40 \\ \hline 115 \end{array}$$

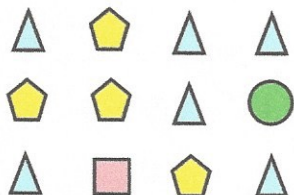
115

$65 \div 5$




$$\begin{array}{r} 13 \\ 5 \overline{) 65} \\ \underline{5} \\ 15 \\ \underline{15} \\ 0 \end{array}$$

13

Complete the tally chart



Shape	Tally
Circle	
Pentagon	
Square	
Triangle	



Put the prices of these sheds in order, starting with the lowest.

D, C, B, A

In this magic square, all rows, columns and diagonals add up to 15.

Find the missing numbers

2	7	6
9	5	1
4	3	8