

Name: _____

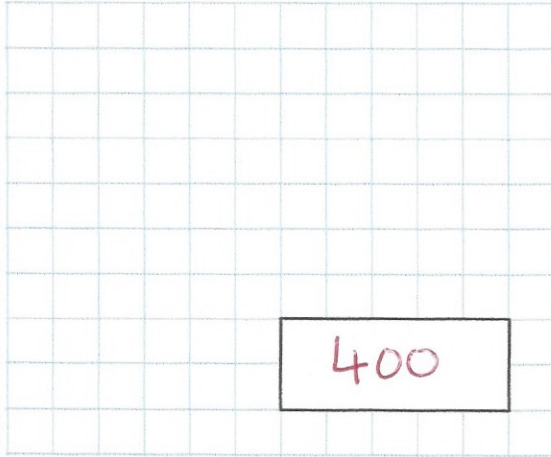
Primary 5-a-day

Bronze



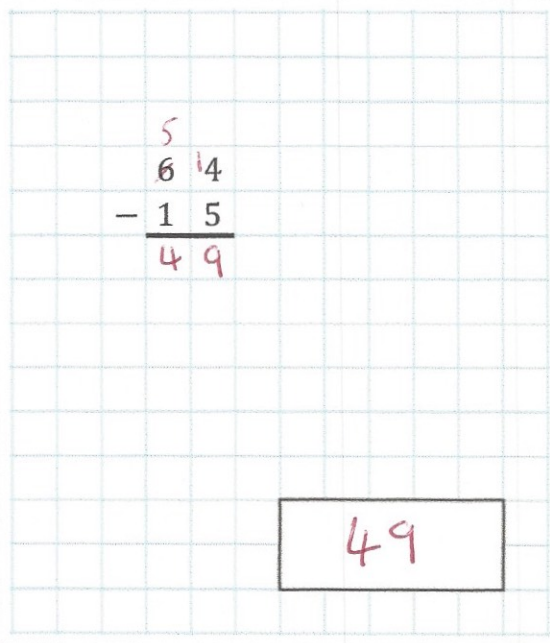
13th May

$$20 \times 20$$



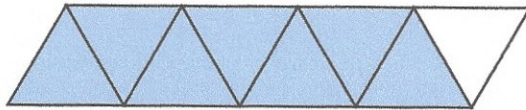
400

$$\begin{array}{r} 5 \\ 64 \\ - 15 \\ \hline 49 \end{array}$$



49

Jack wants to shade $\frac{1}{2}$ of this shape.
He has shaded 7 triangles.



How many extra triangles has he shaded?

3

Circle the number that is odd

14 17 22 30 58

A farmer has 180 eggs.
He stores them in trays.
Each tray holds 30 eggs.

How many trays does he need?

$$180 \div 30 = 6$$



6