

Name: Answer


Primary 5-a-day

Gold



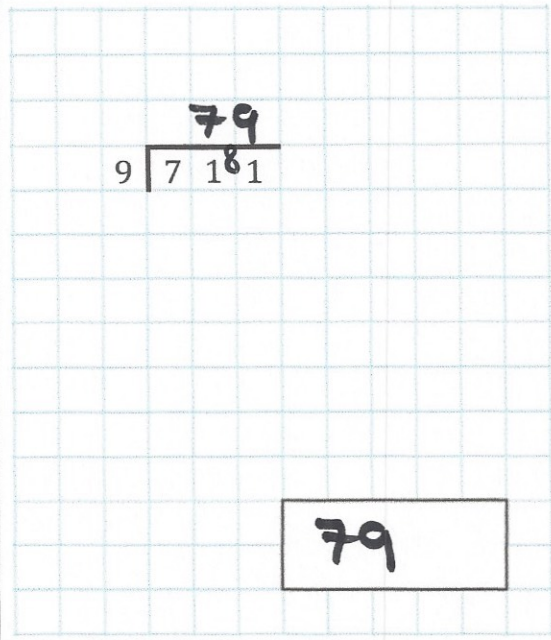
2nd February

$4^2$



16

$$\begin{array}{r} 79 \\ 9 \overline{) 7181} \end{array}$$



79

A snowboarder completes 3 somersaults in a jump.

How many degrees does she turn through in the jump?

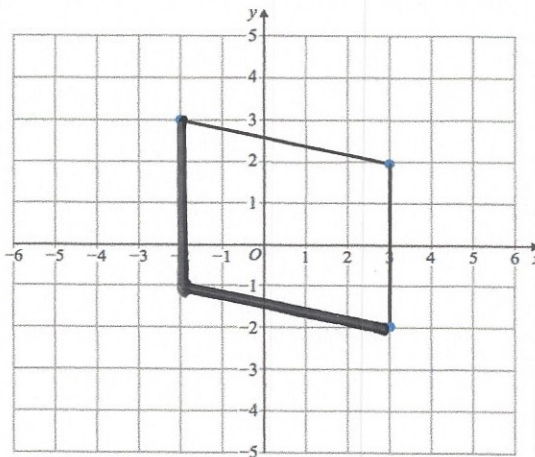
1080°



$$\begin{aligned} 3 \times 360 \\ = 1080 \end{aligned}$$

Two sides of a parallelogram have been drawn.

Complete the parallelogram



How many lines of symmetry does the parallelogram have?

None