



5th February

$$\frac{2}{7} = \frac{6}{21}$$

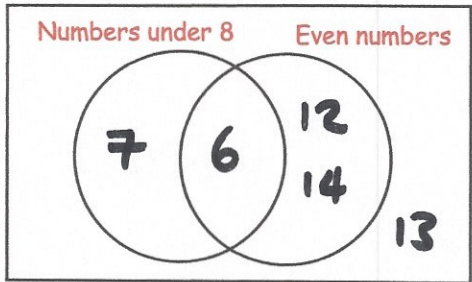
21

$$209 \times 1,000$$

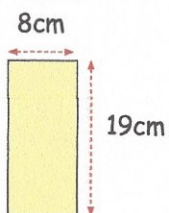
209,000

Put these numbers in the correct place on the diagram

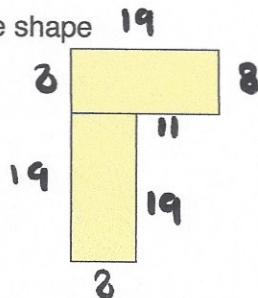
6 7 12 13 14



A shape is made from two rectangular tiles like this



This is the shape



Work out the area of the shape

$$19 \times 8 = 152$$

$$152 \times 2 = \underline{304 \text{ cm}^2}$$

Work out the perimeter of the shape

$$\underline{92 \text{ cm}}$$