



17th April

$0.1 = \frac{1}{10}$


$\frac{1}{10}$

77×91

$$\begin{array}{r} 91 \\ \times 77 \\ \hline 637 \\ 6370 \\ \hline 7007 \end{array}$$

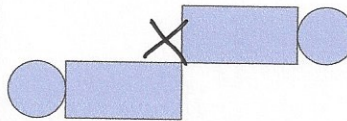
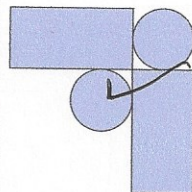
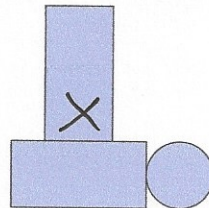
7007

Seb has some rectangular and circular tiles



He makes these patterns with them

For each pattern, put a tick if it has a line of symmetry or a cross if it does not.



Daisy chooses a **cube number**

She rounds it to the nearest hundred.

Her answer is 100.

Write down all the possible ~~prime~~ ^{cube} numbers Daisy could have chosen.

64, 125