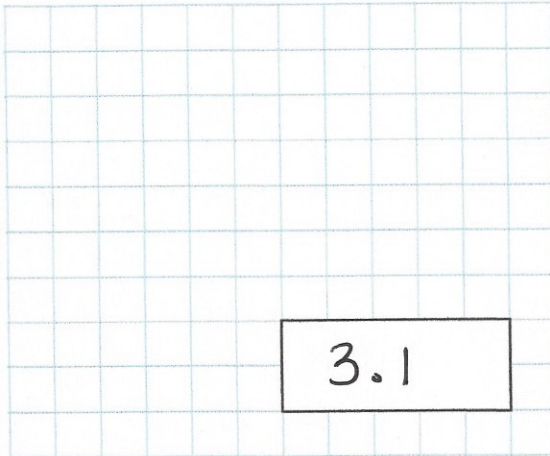




22nd April

$3,100 \div 1,000$

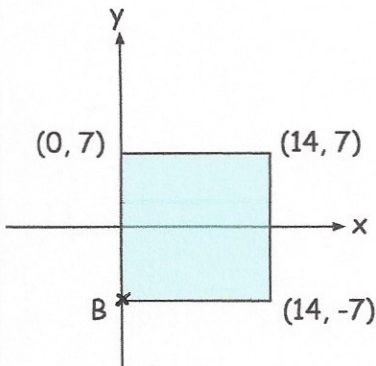


3.1

$$\begin{array}{r} 135 \\ \times 28 \\ \hline 1080 \\ 2700 \\ \hline 3780 \end{array}$$

3780

Here is a shaded square

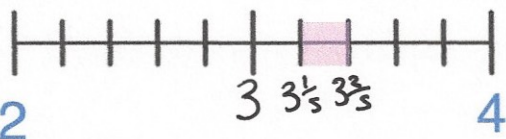


Write down the coordinates of the point B

(0, -7)

Circle any of the points that are outside the square

- (1, 8)
- (8, 1)
- (-1, 2)
- (2, -1)



Circle all the numbers below that belong in the shaded part of the number line.

- $3\frac{1}{2}$
- $3\frac{3}{10}$
- $3\frac{1}{4}$
- $3\frac{1}{3}$
- $3\frac{3}{5}$