

Name: Answers

Primary 5-a-day

Gold



17th September

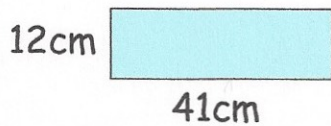
$5,040 \times 1,000$

5,040,000

0.8×9

7.2

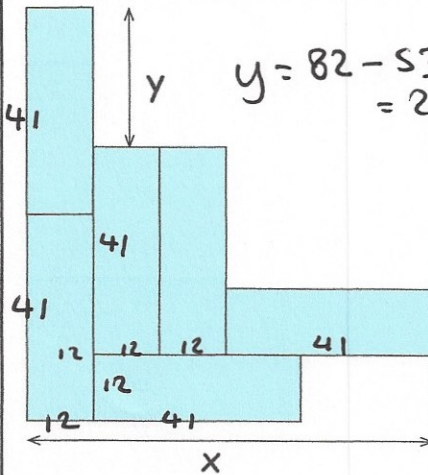
Phoebe has some rectangles. They each measure 41cm by 12cm



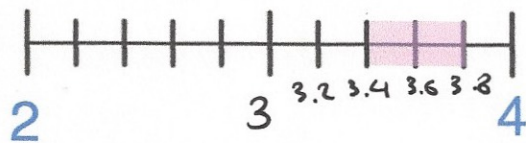
She makes this design with six of the rectangles.

Work out the lengths of x and y.

$y = 29 \text{ cm}$
 $x = 77 \text{ cm}$



$x = 41 + 3 \times 12 = 77$



Circle all the numbers below that belong in the shaded part of the number line.

- $3\frac{1}{2}$ (circled)
- $3\frac{3}{10}$
- $3\frac{1}{4}$
- $3\frac{1}{3}$
- $3\frac{3}{5}$ (circled)