



26th July

$$33 + 49 + 17$$

$$\begin{array}{r} 33 \\ 49 \\ + 17 \\ \hline 99 \\ \hline \end{array}$$

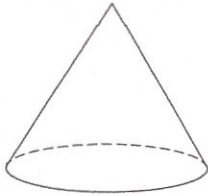
99

$$423 - 15$$

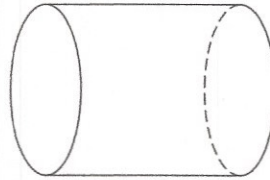
$$\begin{array}{r} 423 \\ - 15 \\ \hline 408 \end{array}$$

408

Write down the name of this 3D shape

Cone

Write down the name of this 3D shape

cylinder

8

7

9


Using each number card once, make the **largest** possible number

9 8 7

Bethany puts five 20p pieces into the piggy bank.

Her mum then puts five 50p pieces into the piggy bank.

How much money is in the piggy bank?



$$\begin{array}{r} 5 \times 20p = \cancel{1} \\ 5 \times 50p = \pounds 2.50 \\ \hline \pounds 3.50 \end{array}$$