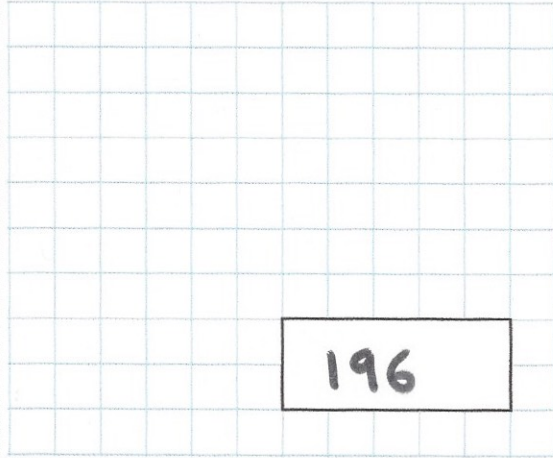




27th July

$$-9 + 205$$



196

$$712 \times 49$$

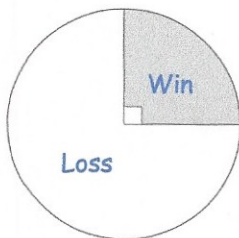
$$\begin{array}{r} 712 \\ \times 49 \\ \hline 6408 \\ 28480 \\ \hline 34888 \end{array}$$

34888

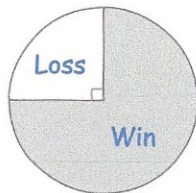
Hannah and Rory play tennis for their school.

The pie charts show information about their results

James says that Hannah has won more matches than Rory.



Hannah

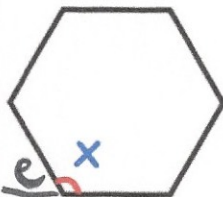


Rory

Explain how James might be correct

If Hannah has played more goals

Shown is a regular hexagon



Find the size of angle x

$$e = 360 \div 6 = 60^\circ$$

$$x = 180 - 60 = \underline{120^\circ}$$