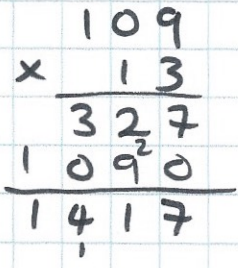



20th March

1.09 × 13



.14.17



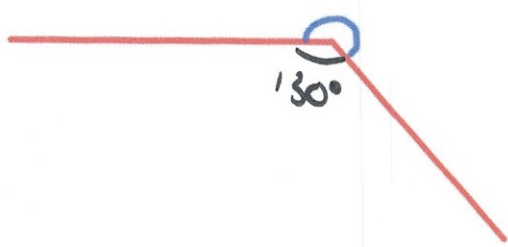
153

Two glasses contain orange juice.
 A 400ml glass is 40% full.
 A 300ml glass is half full.
 Which glass contains less orange juice?

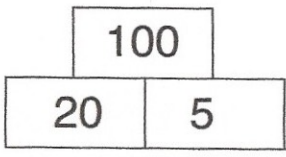
40% of 400 = 160 ml
 1/2 of 300 = 150 ml
 The 300 ml contains less

Measure this reflex angle

230°



In this multiplication pyramid, two numbers are multiplied to give the number above.



Find the missing numbers

