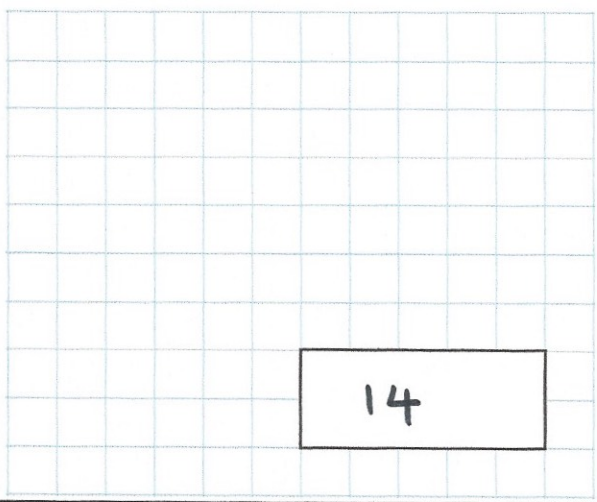


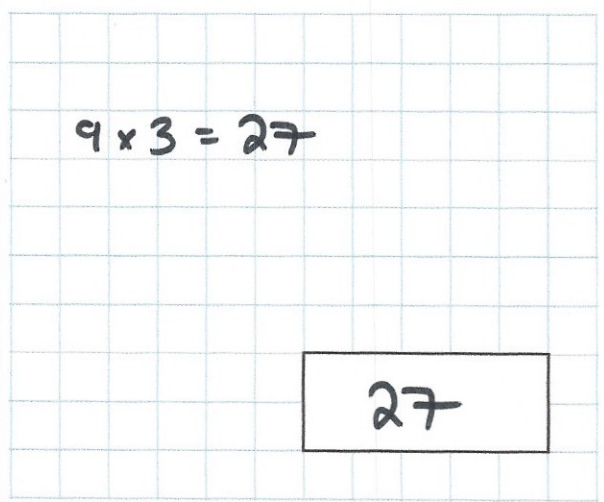
3rd March

$0.07 \times 200$



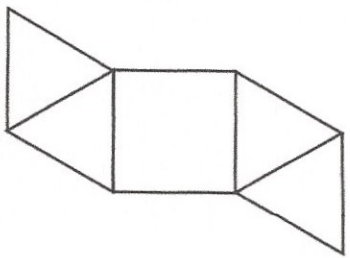
14

9% of 300



$9 \times 3 = 27$

27



This is a net for which 3D shape?

square based pyramid

Concrete is made by mixing **cement**, **sand** and **gravel** in the ratio 1 : 2 : 3

How many kilograms of **cement** and **gravel** are needed to mix with 30 kilograms of sand?

$1 : 2 : 3 \times 15$   
 $? : 30 : ?$

15 kg of cement      45 kg of gravel

A white square is painted in one corner of a red square.  
 Each side of the white square is a **third** of the length of the red square.

What is the area of the red section?

$12^2 - 4^2 = \underline{128\text{cm}^2}$

