

Name: _____

Primary 5-a-day

Silver



29th August

$6,205 - 777$

$$\begin{array}{r} 519 \\ 6205 \\ - 777 \\ \hline 5428 \end{array}$$

5428

$18 \times 4 = 6 \times \square$

$$\begin{array}{r} 18 \\ \times 4 \\ \hline 72 \\ 3 \end{array}$$

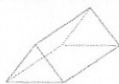
$$72 \div 6 = 12$$

12

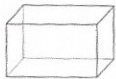
Square-based pyramid



Triangular prism



Cuboid




Triangular-based pyramid



Which shape has the least faces?

Triangular based pyramid
4



The thermometer shows the temperature at 4am in a town.

The temperature increase by 7°C by 10am

What is the temperature at 10am?

$$-3 + 7 = 4$$

4°C

In 2019 the 15th March is a Friday

What day is the 24th March 2019?

Sunday