



6th August

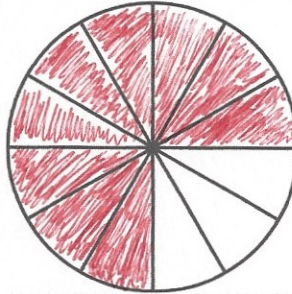
$$705 + 608 + 222$$

$$\begin{array}{r} 705 \\ 608 \\ +222 \\ \hline 1535 \end{array}$$

1535

$$80 \times 100$$

8000

Shade $\frac{3}{4}$ of the circle


At the start of the week, a greengrocer had 2,968 apples.

During the week,

- 1,009 more apples were delivered
- 2,771 apples were sold

How many apples were left at the end of the week?

$$\begin{array}{r} 2968 \\ -2771 \\ \hline 197 \end{array}$$



$$\begin{array}{r} 197 \\ +1009 \\ \hline 1206 \end{array}$$

1206

A stack of 10 identical boxes is 150cm tall

Jake removes 7 boxes.

How tall is the stack now?


$$10 - 7 = 3$$

$$3 \times 15 = 45$$

$$150 \div 10 = 15 \text{ cm}$$

$$1 \text{ box} = 15 \text{ cm}$$

$$\underline{45 \text{ cm}}$$



150cm