

Name: _____

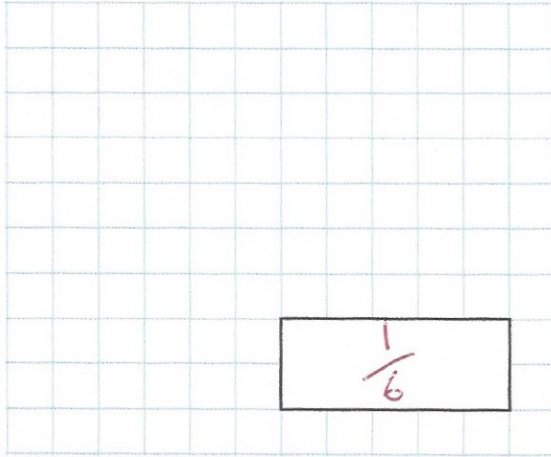
Primary 5-a-day

Silver



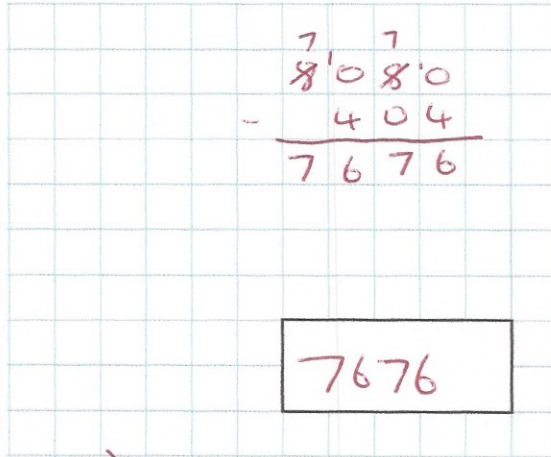
31st March

$$\frac{5}{6} - \frac{4}{6}$$



$$\frac{1}{6}$$

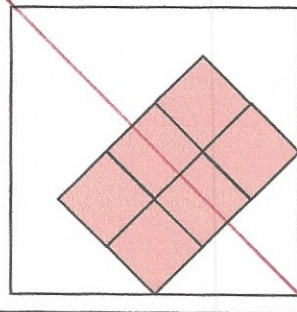
$$8,080 - 404$$



$$\begin{array}{r} 7 \quad 7 \\ 8'08'0 \\ - \quad 404 \\ \hline 7676 \end{array}$$

$$7676$$

This square tile has a symmetrical pattern
Draw the line of symmetry on it



Change 4 metres into centimetres

$$400\text{cm}$$

Change 7000 kilometres into metres

$$7000000\text{m}$$

What fraction of this shape is **not** shaded?

$$\frac{3}{9} = \frac{1}{3}$$

