



7th April

15% of 32


$$\begin{aligned} 10\% &= 3.2 \\ 5\% &= 1.6 \end{aligned}$$

$$4.8$$

$$\frac{\square}{0.5} = 112$$

$$56$$

Draw the net of a cylinder




Ed has 24 sweets.

The ratio of green to red sweets is 3:5.

How many red sweets does Ed have? 15

$$\begin{aligned} 24 \div 8 &= 3 \\ 3 \times 5 &= 15 \end{aligned}$$




Henrik has 50 centimetre cubes.

He wants to make a cube with edges that are 4cm long.

How many more centimetre cubes does he need?

$$14$$



$$4^3 = 64$$