

Name: \_\_\_\_\_

Primary 5-a-day

Bronze



1st February

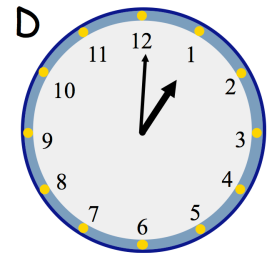

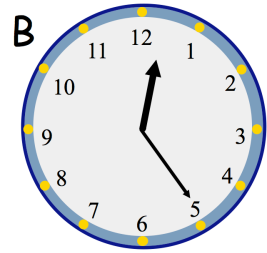
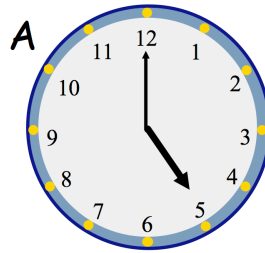
$505 - 20$

Grid for working out  $505 - 20$

$8 \times 7$

Grid for working out  $8 \times 7$

Which clock face shows **five past twelve**?



Which clock face shows **five o'clock**?

Which number comes **halfway** between **160** and **220**

