



27th February

$$\frac{1}{2} \text{ of } 44$$





$$810 + 200$$

Write **am** or **pm** in each box
James has his dinner at **half past five**

5:30

James goes to school each morning at **nine o'clock**

9:00

A £250 	B £249 
C £235 	D £199 

Put these bicycles in order of price, starting with the **lowest price**

A car park charges 60p to park a car for 30 minutes.
Tina parks in the car park for 1 hour.
How much does she pay?

30 minutes = 60p

