

Name: \_\_\_\_\_

Primary 5-a-day

Bronze



30th March

$62 \div 2$

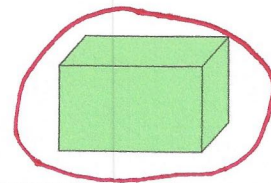
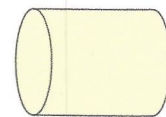
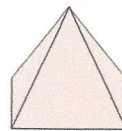
$$\begin{array}{r} 31 \\ 2 \overline{) 62} \\ \underline{6} \phantom{2} \\ 0 \phantom{2} \\ \underline{0} \\ 0 \end{array}$$

31

$4 \times 9$

36

Circle the shape that has the most faces



Alice collected information about the pets her friends owned.

Here are her results

Pet	Number owned
Dog	6
Cat	9
Rabbit	12

The bar chart shows the information from the table

Fill in all the missing labels

