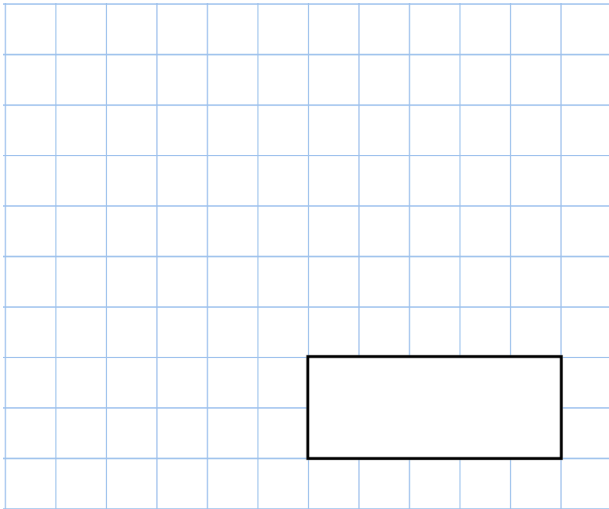


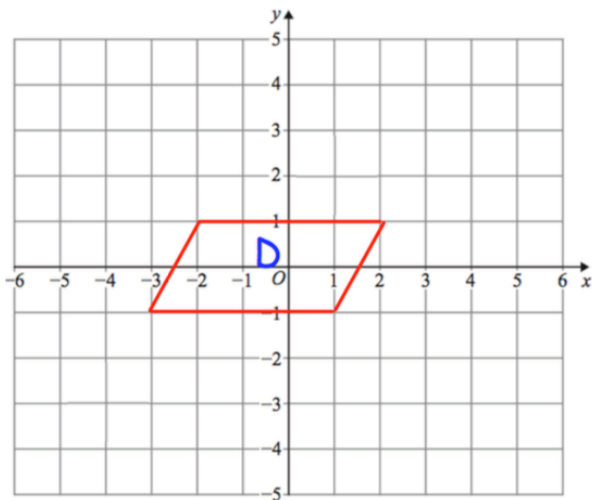
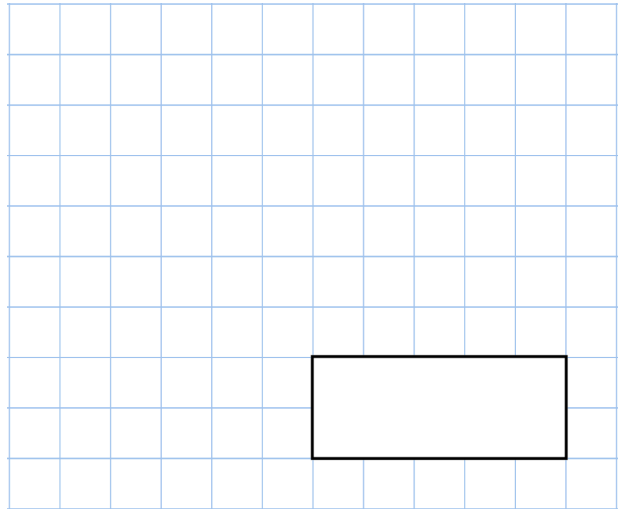


28th February

$$2.561 + 3.64$$



$$\frac{1}{2} + \frac{1}{8}$$



The parallelogram D is translated
1 **left** and 2 **down**


Draw the parallelogram in its new position

Plot the point (5, -1)

Miles and Megan buy 24 cans of fizzy drink.

Miles

24 cans at 62p each



Megan

Pack of 24 cans for £13.21



How much more money does Miles pay than Megan?