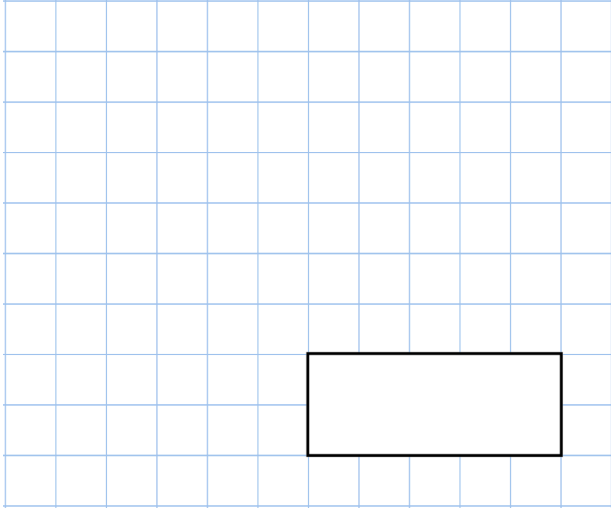




5th February

$$\frac{2}{7} = \frac{6}{\square}$$

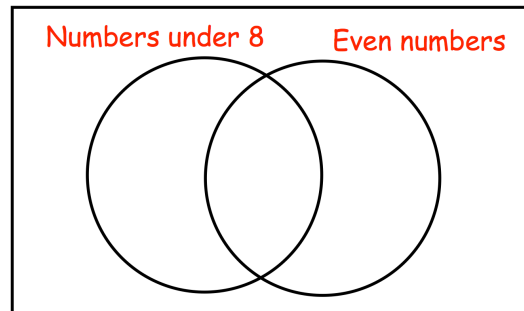


$$209 \times 1,000$$

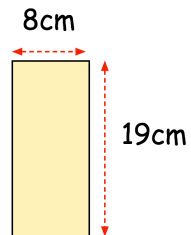


Put these numbers in the correct place on the diagram

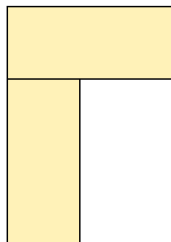
6 7 12 13 14



A shape is made from two rectangular tiles like this



This is the shape



Work out the area of the shape

Work out the perimeter of the shape