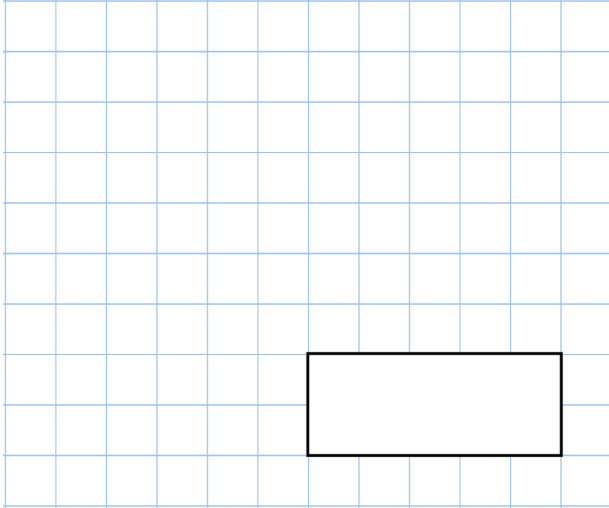
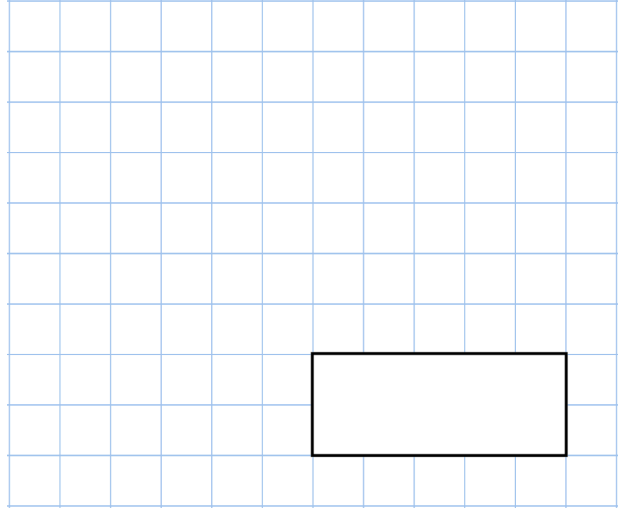


**19th January**


$$1,332 \div 12$$



$$\frac{4}{7} + \frac{2}{3}$$



Work out the area of this rectangle



On a map, 1cm represents 40km

The distance between two cities is 340km

On the map, what is the distance between the two cities?

Two identical regular pentagons are shown.

Find angle x

