





20th January

60% of 1,800



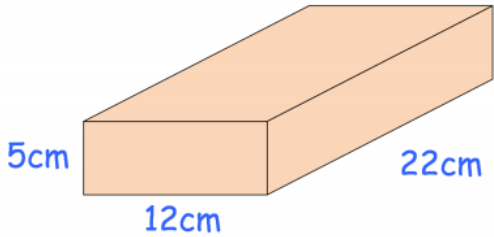
16 × 9.1



Draw two quadrilaterals with diagonals that **do not** cross at right angles

.
.
.
.
.
.
.
.
.
.

Work out the volume of this cuboid



Which is larger 20% of 7 or 7% of 20?