

Name: _____

Primary 5-a-day

Silver







10th September


$70,000 - 8,000$

62000

$450 \div 5$

90

Ben		45
Cara		20
Dylan		25
Ellie		50

Key  = £10

How much money do they have in total?

140

Write 70 in Roman numerals

LXX

What type of triangle is shown?

Isosceles

