

Name: _____

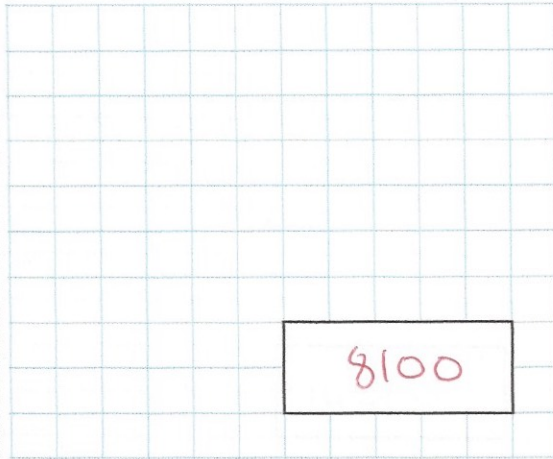
Primary 5-a-day

Silver



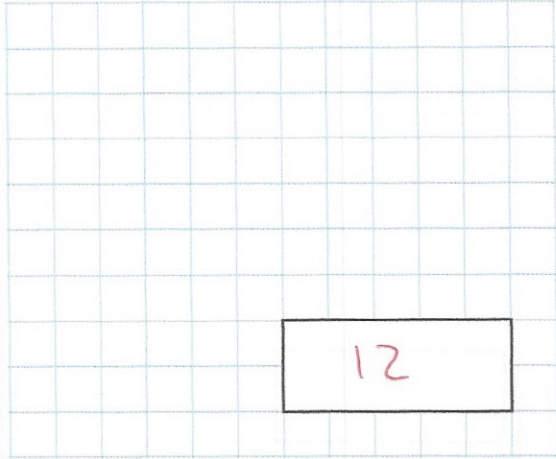
11th September

90×90



8100

$144 \div 12$



12

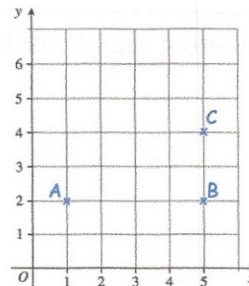
Arrange these numbers in order, starting with the largest

16,345 16,400 16,054 16,305

16,400, 16,345, 16,305, 16,054

Write down the coordinates of the point B

(5, 2)



Shade one more square so this pattern has **one line of symmetry**

