



13th September

$43 \times 2$

$$\begin{array}{r} 43 \\ \times 2 \\ \hline 86 \end{array}$$

86

$300 - 120$

$$\begin{array}{r} 300 \\ - 120 \\ \hline 180 \end{array}$$




180

10  $\xrightarrow{\text{is 36 less than}}$  46

55

 $\xrightarrow{\text{is 36 less than}}$  91

$$\begin{array}{r} 91 \\ - 36 \\ \hline 55 \end{array}$$



Put the prices of these sheds in order, starting with the highest.

D, A, B, C

## Menu

Coffee	£1.60 ✓	2.00
Tea	£1.00	+ 1.80
Scone	£2.00 ✓	3.80
Biscuit	£0.80	

Grace buys a **coffee** and a **scone**. She pays £5

How much change does she get?

$$\begin{array}{r} 5.00 \\ - 3.80 \\ \hline 1.20 \end{array} \quad \text{£1.40}$$