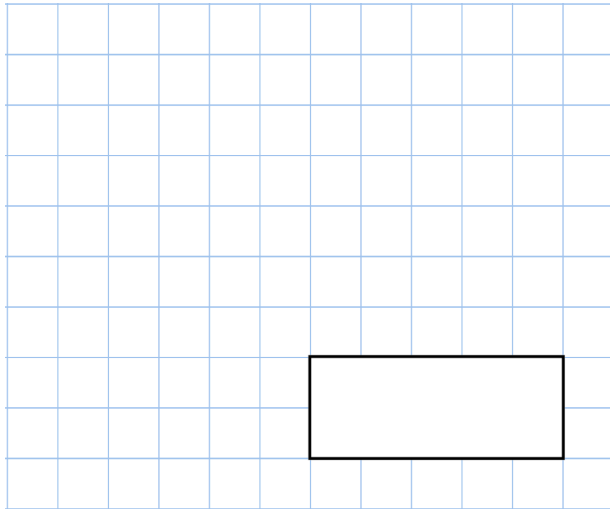


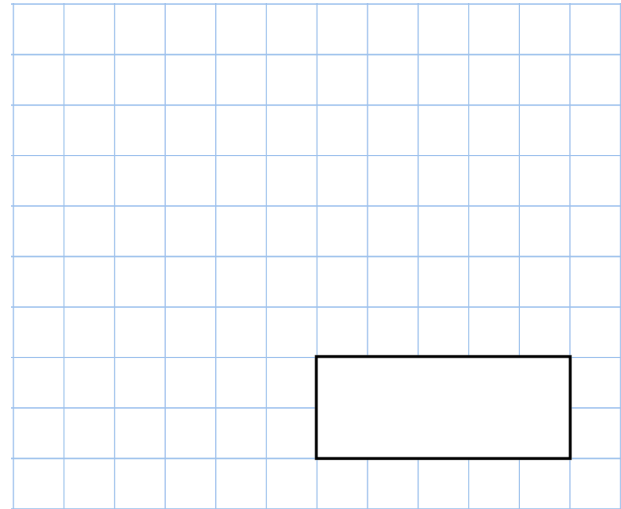


16th February

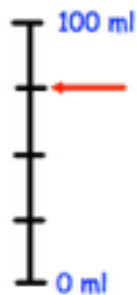
$6.1 - 1.6$



11×11



What measurement is shown on the scale?



River	Length in kilometres
Amazon	6,992
Mississippi	3,734
Rhine	1,233

How much longer is the Amazon than the combined length of the other two rivers?

Write these numbers in order of size, starting with the **largest**.

1.25 1.4 1.19 1.2