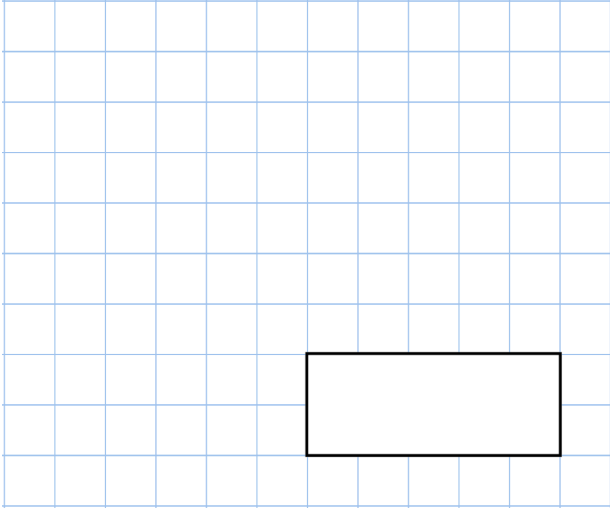
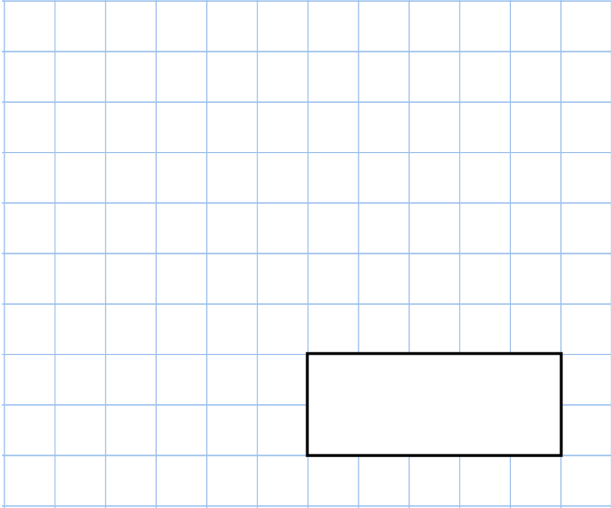





<b>20th February</b>	
$30 \times 50 \times 20$   <input type="text"/>	$466 - 188$   <input type="text"/>
What time is shown on the clock?	
Circle the type of angle marked between the hour and minute hand.  Acute   Right   Obtuse   Reflex	
At the start of the week, a greengrocer had 2,568 apples.  During the week, <ul style="list-style-type: none"><li>- 4,009 more apples were delivered</li><li>- 5,771 apples were sold</li></ul>	How many apples were left at the end of the week?  