

**16th January**

$$\frac{3}{4} \text{ of } 24$$

$$11 \times 12$$

2936 people visited a library last week.

Round this number to the nearest 10.

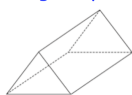
4761 people visited a museum last week.

Round this number to the nearest 100.

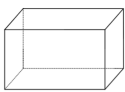
Square-based pyramid



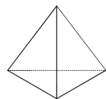
Triangular prism



Cuboid



Triangular-based pyramid



Which shape has the most vertices?

In 2017 the 22nd June was a Thursday

What day was the 3rd July 2017?