



2nd January

$$425 - 170$$

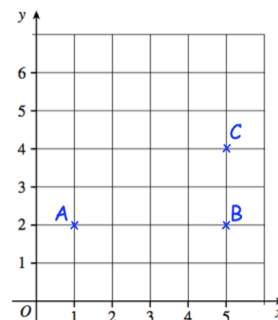
$$8 \times 44$$

Arrange these numbers in order, starting with the largest

15,123 15,200 15,032 15,103

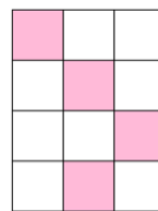
Three points are shown on a grid.
ABCD is a rectangle.

Write down the coordinates of the point D

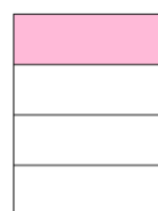


Two of the shapes have been shaded so that $\frac{1}{3}$ of the shape is pink.


Which shape has **not** been shaded $\frac{1}{3}$ pink?



Shape A



Shape B



Shape C