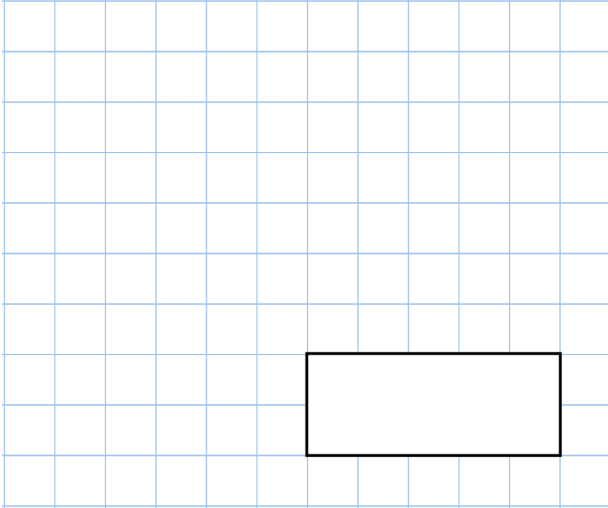
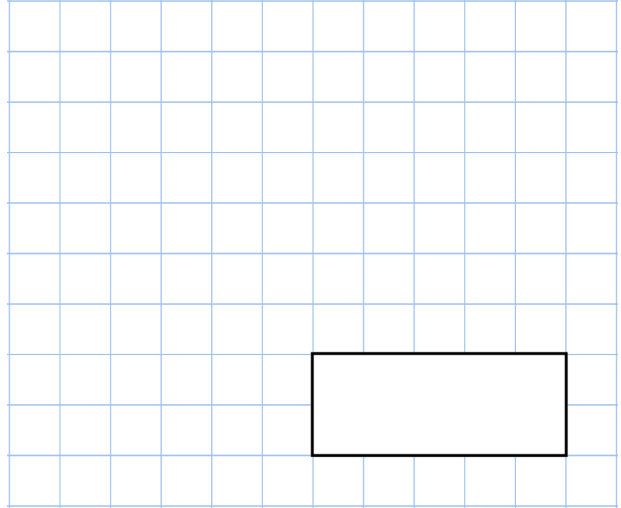


**31st January**

$$\frac{4}{15} + \frac{7}{15}$$

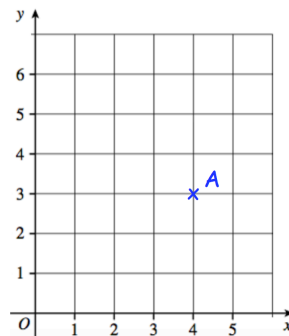


$$160 \div 20$$

**15cm**

Work out the perimeter of the square

The point A is plotted on the grid  
Write down the coordinates of the point A



Helen chooses a number  
She multiplies it by 3 and then adds 15  
Her answer is 75.  
What was the number she started with?