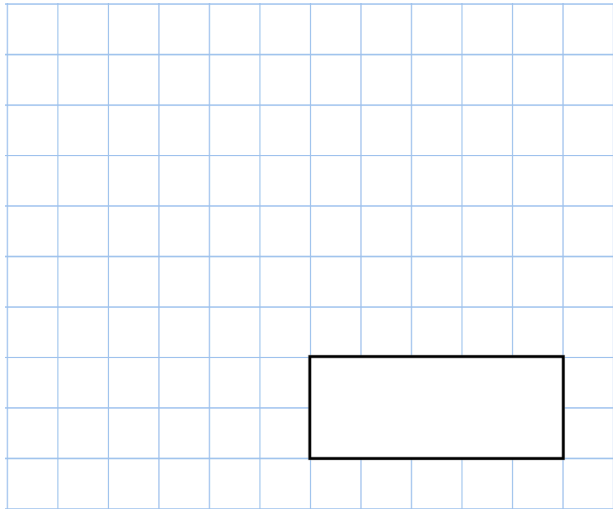


Name: _____

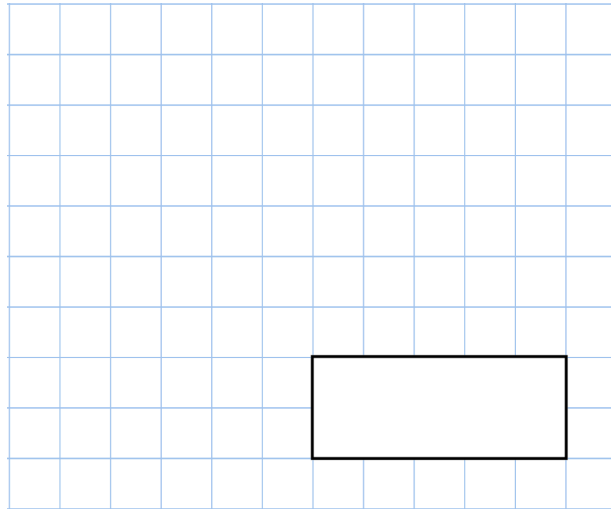


25th April

$28 \div 4$



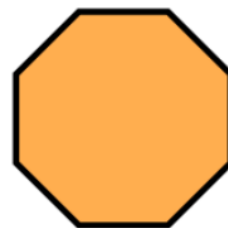
60×4



Fill in the missing numbers

$$\begin{array}{r}
 9 \square \\
 - \square 3 \\
 \hline
 75
 \end{array}$$

Name this shape



Shade $\frac{1}{4}$ of the shape

