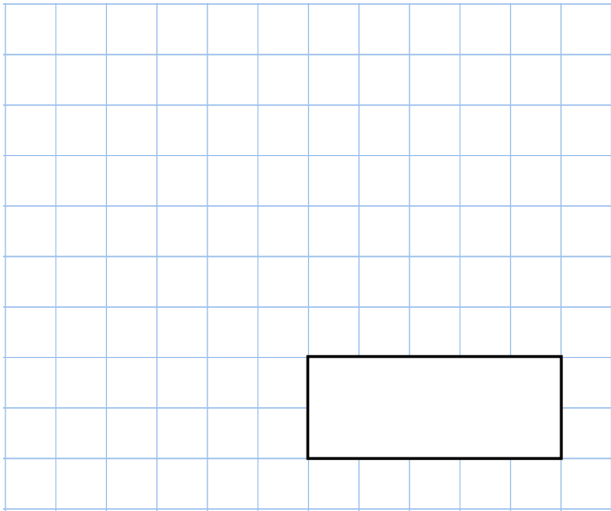


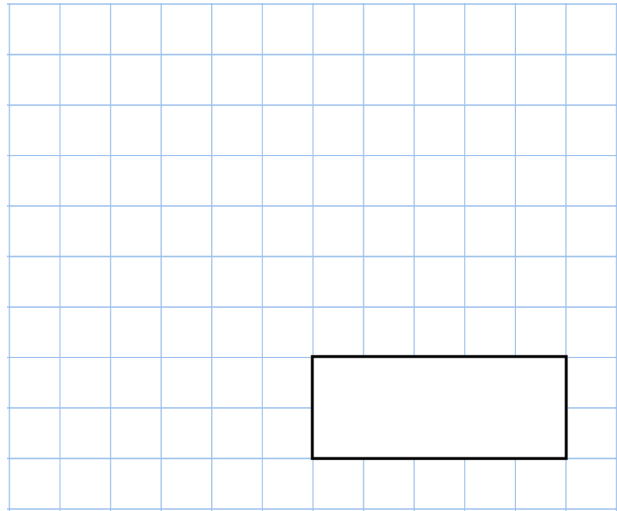


26th April


$$434 - 9$$



$$53 + 18$$



A shop sells cupcakes in **boxes of 8** and **boxes of 6**



Box of 8 cupcakes



Box of 6 cupcakes

Ciara bought **6 boxes of 6 cupcakes**

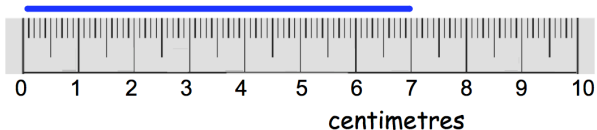
How many cupcakes did she get?

Diane bought some **boxes of 8 cupcakes**

Altogether she has **32 cupcakes**

How many **boxes of 8** did she buy?

Madeleine is measuring the length of the blue line.



How long is the line?