

**21st August**

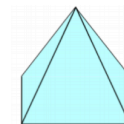
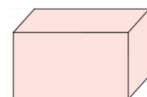
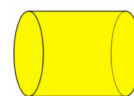
$$\begin{array}{r} 81 \\ - 39 \\ \hline \end{array}$$

$300 - 120$

Mollie has 22p
Erin has 40p

How much money should Erin give Mollie so that they have the **same amount of money**?

Two shapes have **more than 6 edges**
Circle them.



Chloe is late arriving at school.
She is meant to arrive at 8:55am

The clock shows the time she arrived.

How many minutes late is she?

