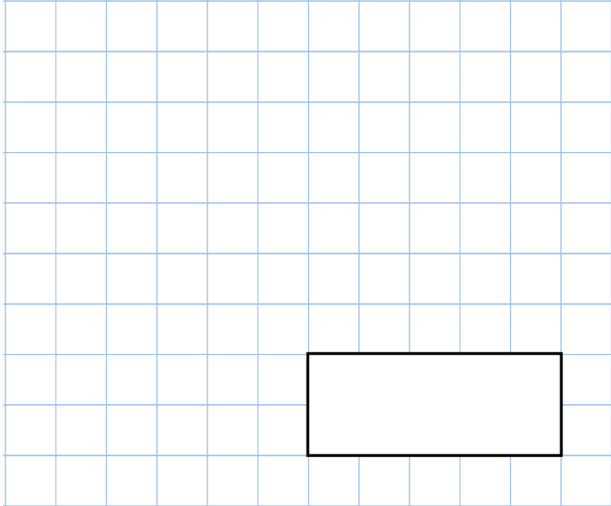
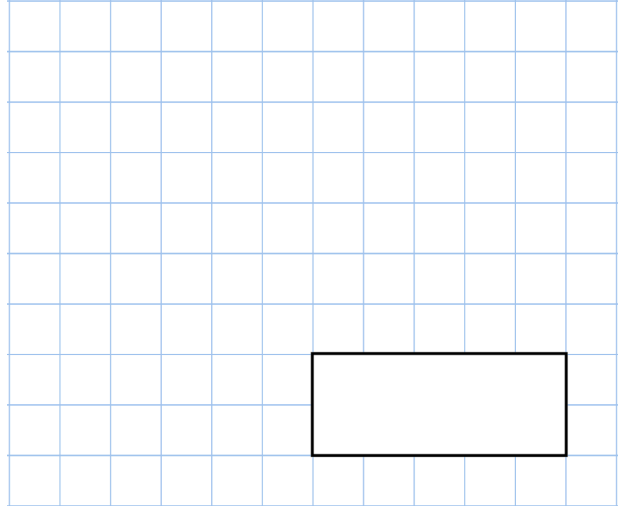


**30th August**

$21 \div 7$



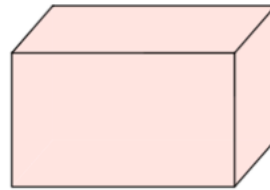
$55 + 34 + 11$



Isabelle is making a tally chart.

Finish the tally chart for her.

Day	Tally	Frequency
Monday	+++ +++	12
Tuesday		
Wednesday		7
Thursday	+++ +++ +++	
Friday		10

How many **vertices** does a cuboid have?Show **half past nine** on the clock