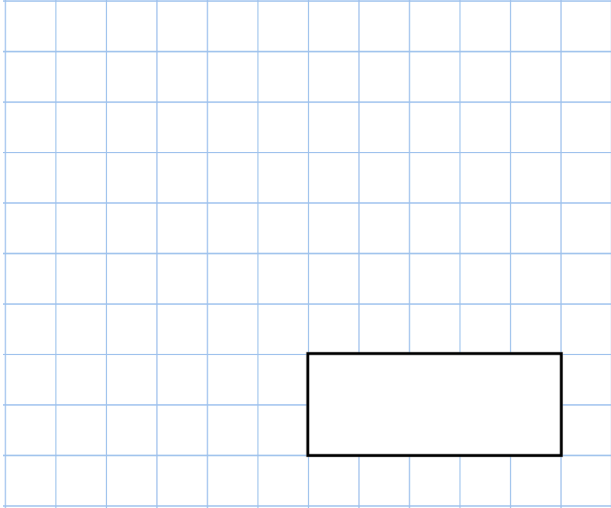


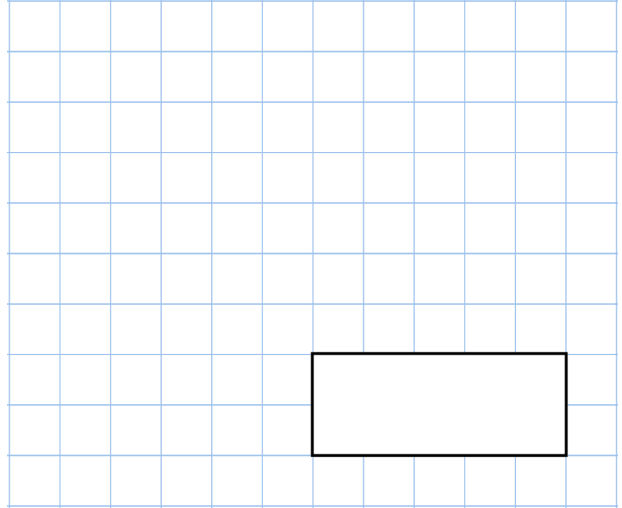


23rd July

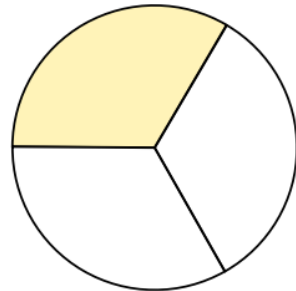
$$7 \times 7$$



$$\frac{1}{4} \text{ of } \boxed{} = 8$$



What fraction of this shape is **not shaded**?



City	9am	3pm
London	6°C	19°C
Madrid	10°C	32°C
New York	11°C	28°C
Paris	5°C	19°C

Which city had the highest temperature at 9am?

Which city had the lowest temperature at 9am?

Which two cities had the same temperature at 3pm?