



3rd July

$305 - 20$


7×7










Sharon has a bag of 32 biscuits.

$\frac{1}{4}$ of the biscuits are chocolate.

How many biscuits are chocolate?

Jessica asked her friends their favourite colour.

Key  = 2 children

Blue	 
Green	  
Pink	 
Red	 

How many picked blue?

How many friends did she ask altogether?