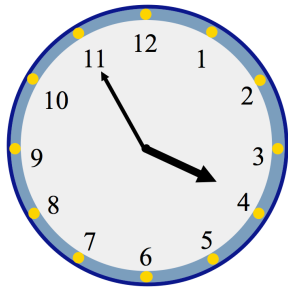




28th June

$485 + 7$

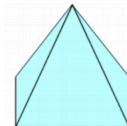
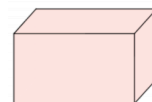
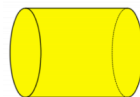
8×0



What time is shown on the clock?

minutes to

Circle the cuboid

Work out the **product** of 5 and 12