



3rd June

$$44 \div 4$$

$$30 \times 30$$

Laura wants to buy a teddy bear.

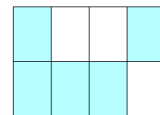

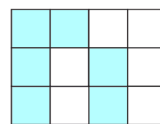
She has £2

How much more money does she need?



£6.50

Circle the shape that is **not** $\frac{1}{2}$ shaded



Lindsey has written down a three-digit number

?	?	?
---	---	---

All the digits are odd
The digits add up to 25

What could her number be?

--	--	--