
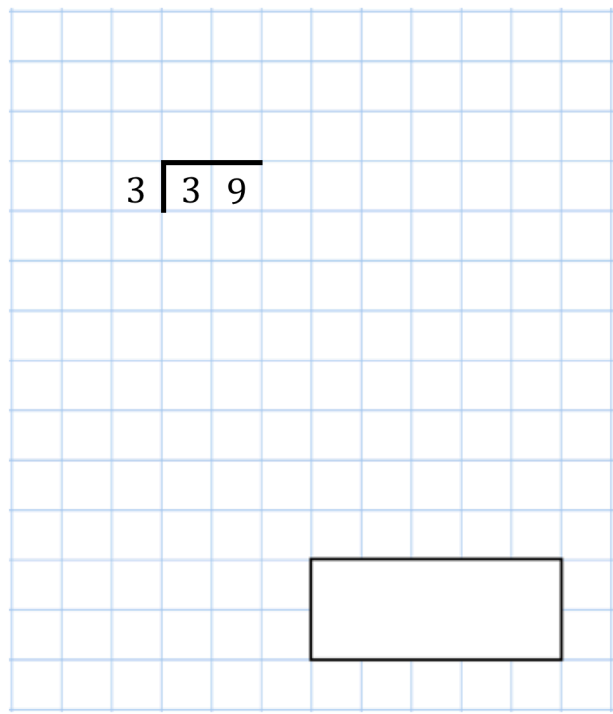
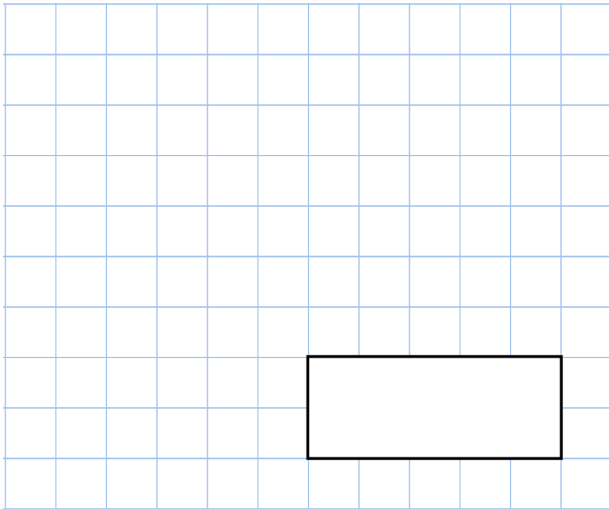




11th March

$6 \times 2 \times 6$



Which shape is exactly $\frac{1}{4}$ shaded?

Which shape is exactly $\frac{3}{4}$ shaded?

Jennifer has 100 cupcakes.
Jennifer gives 72 cupcakes to her brother.
She then shares the rest of the cupcakes equally between her two friends, Megan and Jack.

How many cupcakes did Megan get?