

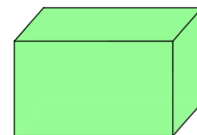
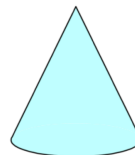
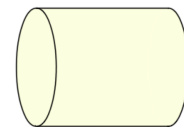
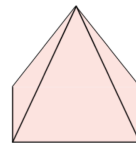


30th March

$62 \div 2$

$4 \times 9$

Circle the shape that has the most **faces**



Alice collected information about the pets her friends owned.

Here are her results

Pet	Number owned
Dog	6
Cat	9
Rabbit	12

The bar chart shows the information from the table

Fill in **all** the missing labels

