



17th May

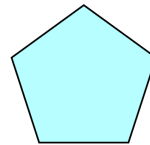
$300 - 50$

2×35

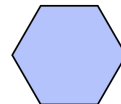
Match each shape to its name.



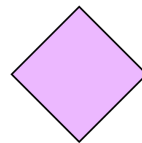
Square



Pentagon



Hexagon



Rectangle

How many sides does an octagon have?

Show the time 7 o'clock

