
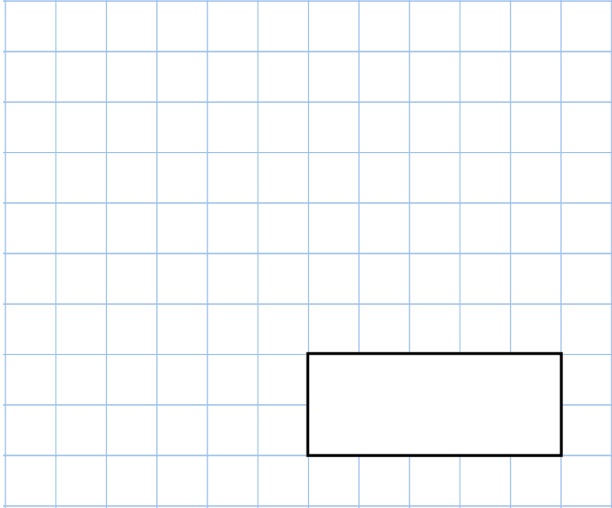




20th September

$1,000 - 30$



3 | 96



Circle the **even** numbers

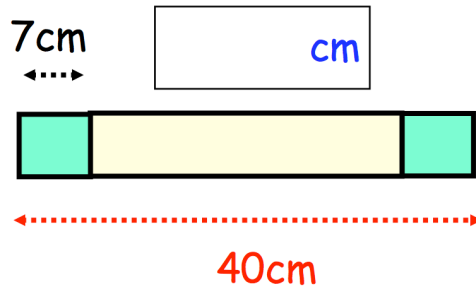
27 24 21

29 26 28

A yellow block and two green blocks are placed in a row.

The two green blocks are the same size.

Find the length of the yellow block



Emma has a bag of 20p coins and Daisy has a bag of 50p coins. Both bags have the same amount of money inside. There are **six** 50p coins in Daisy's bag.

How many 20p coins are there in Emma's bag?

