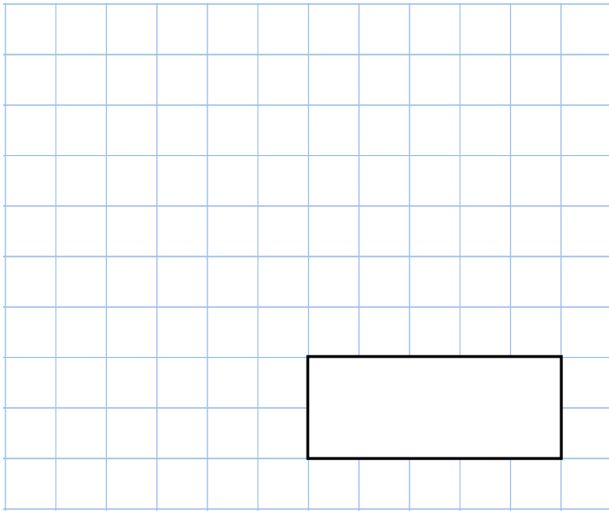


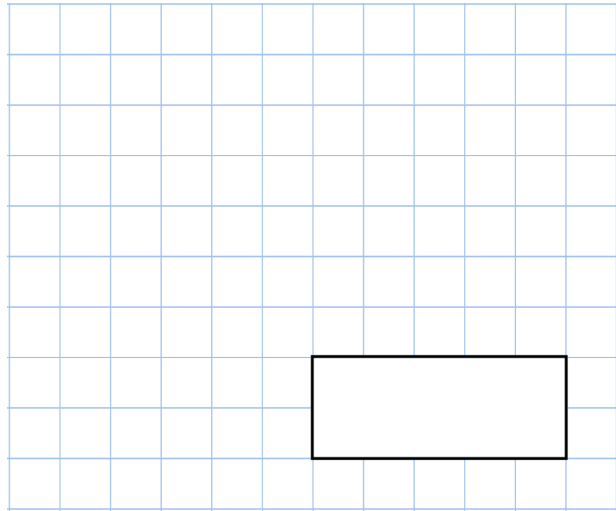


12th April

$$47 \times 24$$

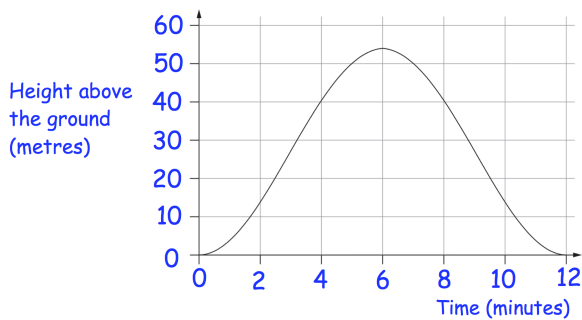


$$\frac{16}{5} = 3 \frac{\square\square}{5}$$



Jessica goes on a big wheel at a funfair.

The graph shows her height above the ground as the wheel turns



How long did it take for the big wheel to make one complete turn?

How long was Jessica over 40m above the ground?

Jodie has a bag of 3 red and 5 green marbles.

Jodie adds two red and two green marbles to the bag.

What fraction of the marbles in the bag are now green?