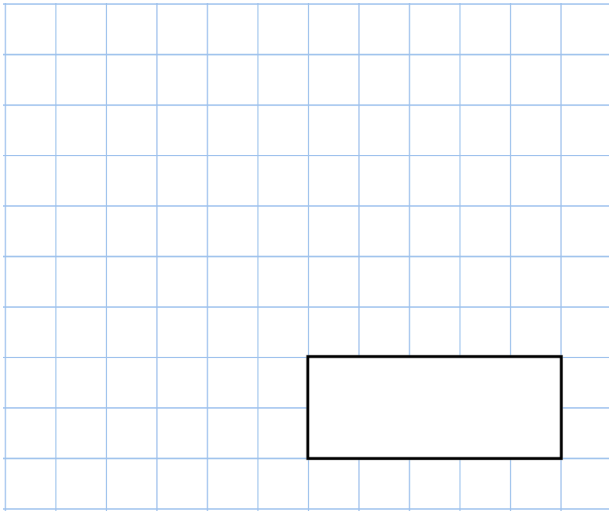
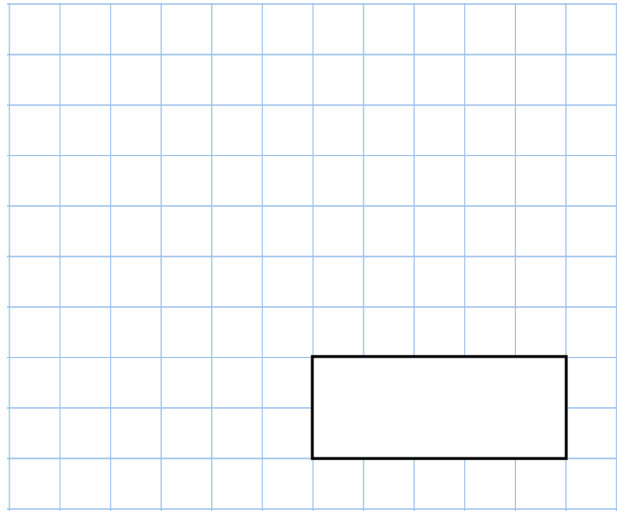


**13th April**

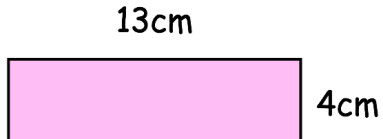
$$\square^2 = 16$$



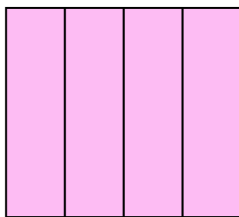
$$70,004 - 608$$



Lauren has some identical rectangles
They are 13cm long and 4cm wide.



She uses four rectangles to make the
larger rectangle below



What is the perimeter of the large
rectangle?

What is the area of the large rectangle?

Kate has £2.80
James has £4.50

James gives Kate some money so that
they now have the same amount of
money.

How much does James give Kate?