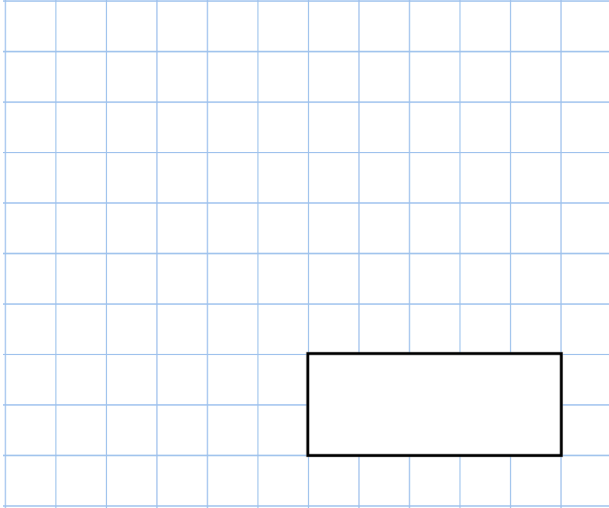


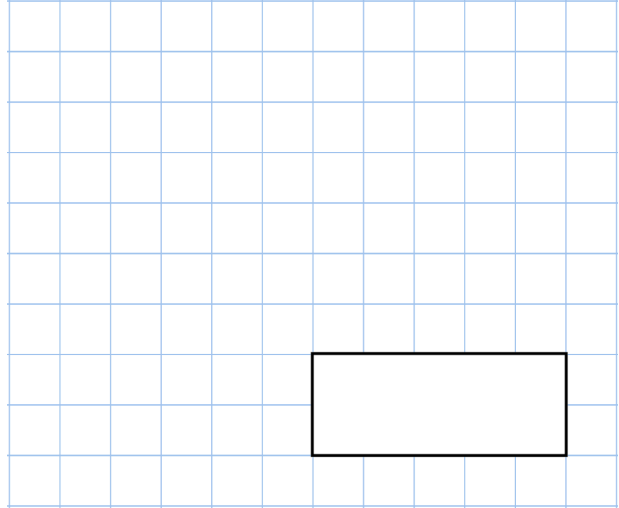


23rd August

$$17 \times 9 \times 12$$



$$\frac{11}{18} + \frac{1}{6}$$



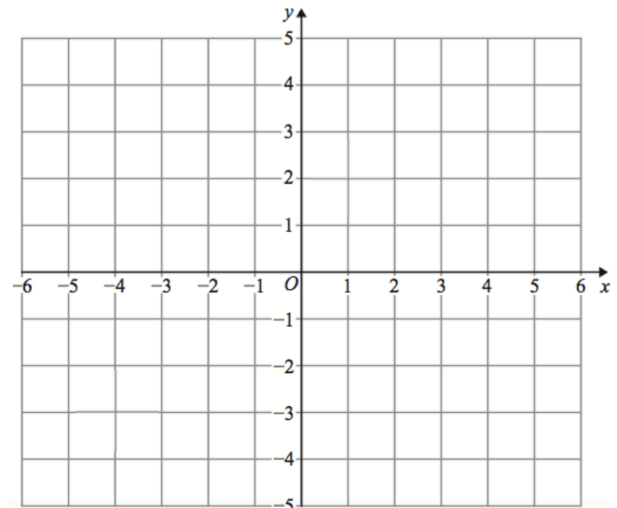
Aidan earns £18 an hour.  
 He works 23 hours in one week.  
 He gives  $\frac{1}{10}$  of his total pay to his mum.

How much money does he give to his mum?

Emily is drawing a rhombus on the grid.  
 She plots three points.

$(-4, 1)$   $(-2, -1)$   $(2, 1)$

Plot these points



Emily has one more point to plot.  
 Write down the coordinates of the fourth vertex of the rhombus