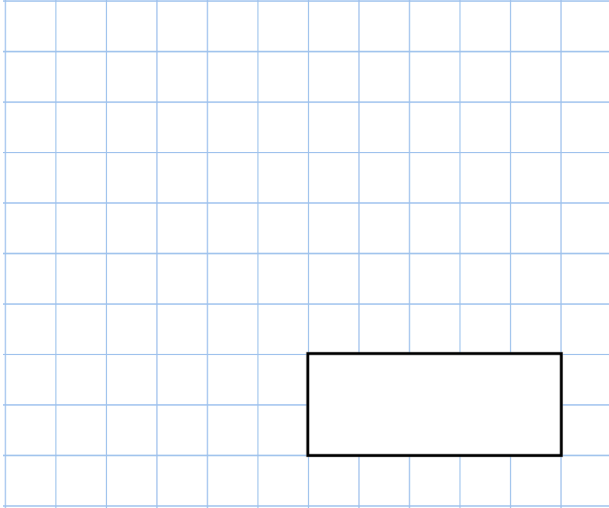


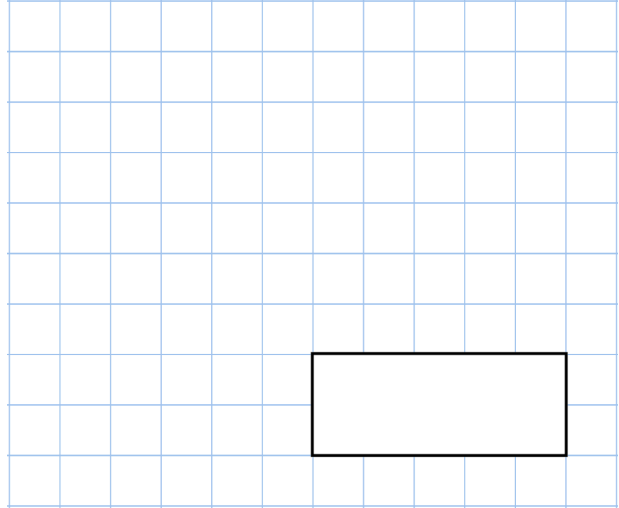


3rd March

10^3



$11 \times 13 \times 7$

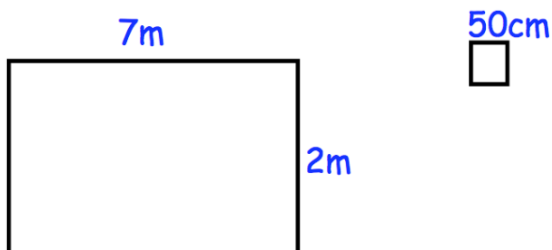


Arrange the landmarks in order, from closest to furthest.

- London Eye 0.41 miles
- Wembley 11.62 miles
- Buckingham Palace 0.8 miles
- Trafalgar Square 0.63 miles
- Hyde Park 2.27 miles
- Thorpe Park 24.7 miles



Henry is tiling his bathroom floor.
The bathroom is 7m long and 2m wide.



Each tile is a 50cm by 50cm square.
Each tile costs £3.

Work out the total cost of tiling the floor.