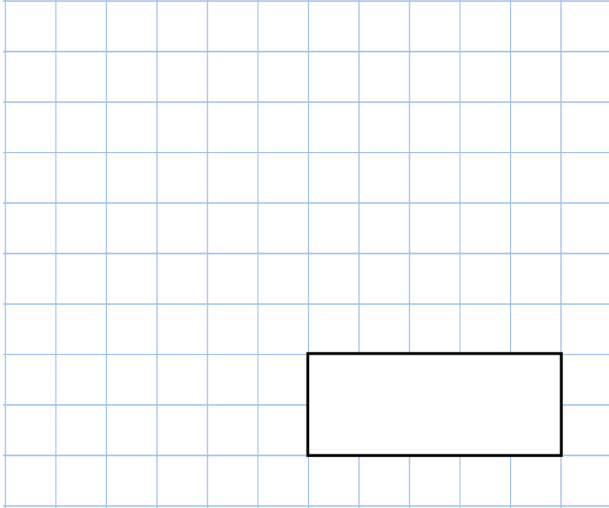
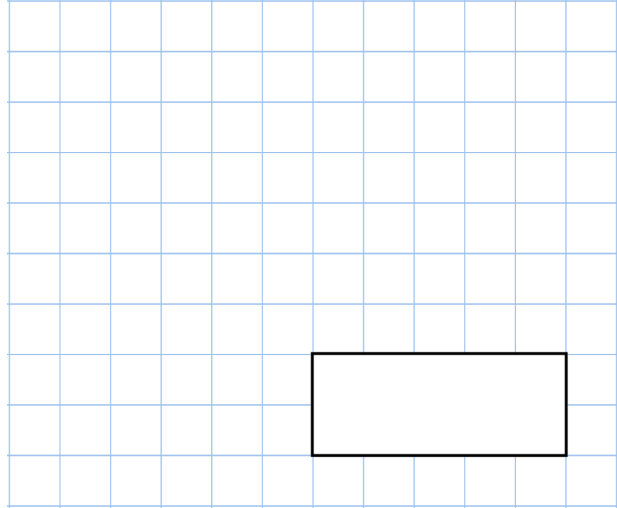


**9th March**

$9^2$



$987 + 1,454 + 5,008$

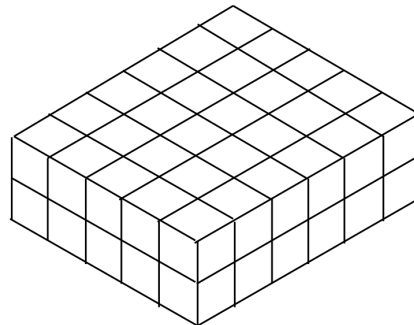


Martha says that 7.2 is less than  $7\frac{19}{100}$

Is she right?

Each cube has a volume of  $1\text{cm}^3$

Work out the volume of the cuboid



A snowboarder completes 4 somersaults in a jump.

How many degrees does she turn through in the jump?

