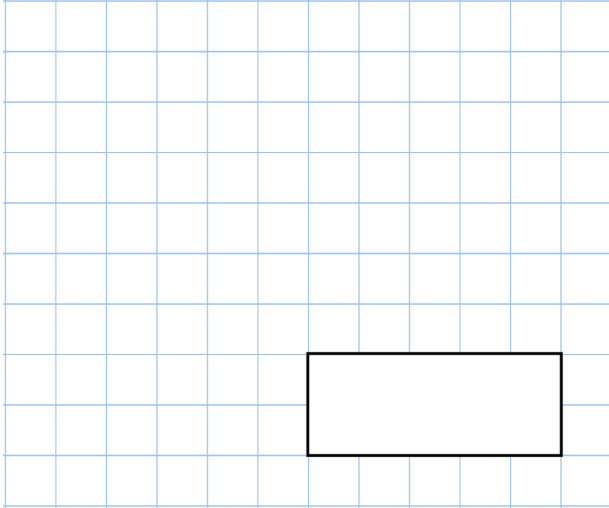


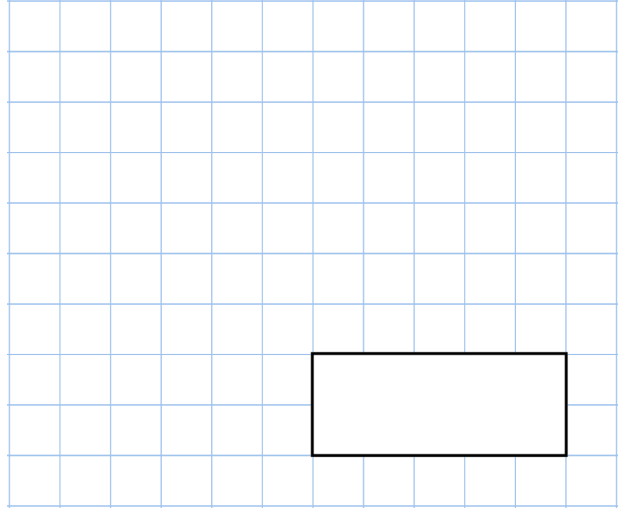


9th May

$$5^{\square} = 25$$



$$\frac{7}{8} - \frac{1}{2}$$



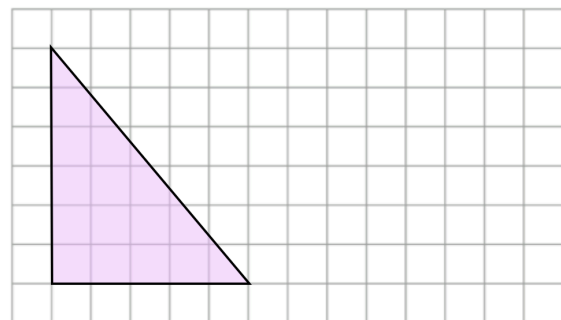
Ava bought three cups of tea.

She pays with a £20 note.

Her change is £16.22

What is the cost of **four** cups of tea?

Draw a rectangle on the grid with the same area as the triangle



The factors of 17 have a sum of 18.

Find the other number whose factors have a sum of 18.