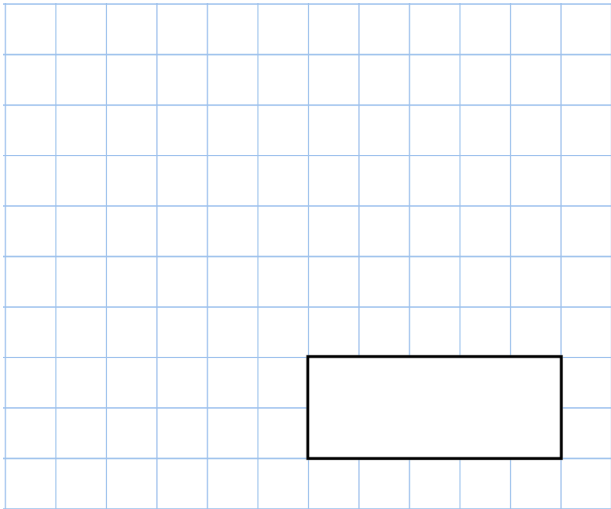


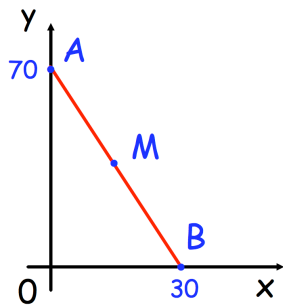
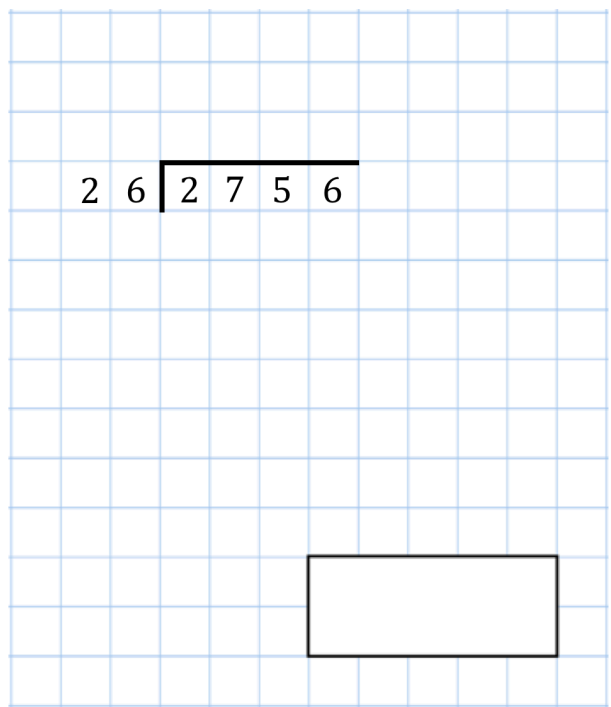


6th July

$15\% \times 380$



$26 \overline{) 2756}$



In this diagram M is an equal distance from A and B.

What are the coordinates of M?

Mr and Mrs Gould have 6 children.  
 The mean age of the children is 12 years.  
 Ben is 7 years old.  
 Chloe is 5 years old.  
 Max is 10 years old.  
 Rose and Lily are both 12 years old.

How old is the sixth child, Keith?

Draw the net of a squared based pyramid